


Name \_\_\_\_\_

## Lesson 3 Reteach


Use the – Symbol



5 minus 2 is 3.


$$5 - 2 = 3$$

1



$$4 \quad \bigcirc \quad 1 \quad = \quad \begin{array}{l} \text{_____} \\ \text{-----} \\ \text{_____} \end{array}$$

2



$$3 \quad \bigcirc \quad 2 \quad = \quad \begin{array}{l} \text{_____} \\ \text{-----} \\ \text{_____} \end{array}$$

1 2 Trace the minus sign to show subtraction. Write the number that tells how many are left.