

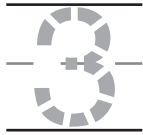
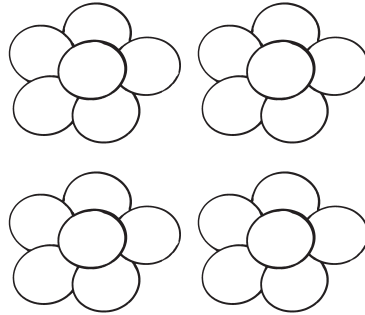
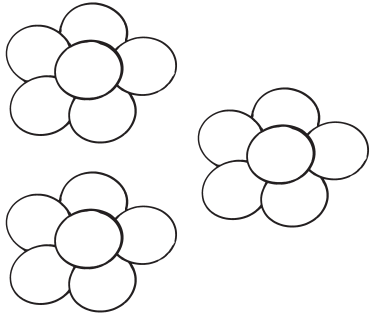
Name \_\_\_\_\_

## Lesson 6 Reteach (I)

Problem Solving

STRATEGY: Write a Number Sentence

1



and

\_\_\_\_\_

-----

\_\_\_\_\_

is

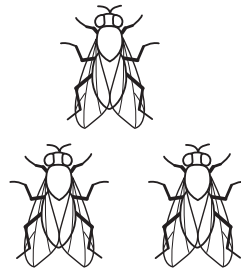
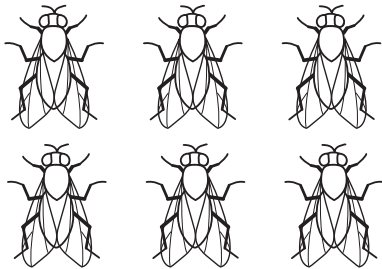
\_\_\_\_\_

-----

\_\_\_\_\_

in all.

2



\_\_\_\_\_

-----

\_\_\_\_\_

and

\_\_\_\_\_

-----

\_\_\_\_\_

is


\_\_\_\_\_

-----

\_\_\_\_\_

in all.

3



\_\_\_\_\_

-----

\_\_\_\_\_

and

\_\_\_\_\_

-----

\_\_\_\_\_

is

\_\_\_\_\_

-----

\_\_\_\_\_

in all.

1 2 3 Write a number sentence to show how many in all. Write the numbers on the lines.


Name \_\_\_\_\_

## Lesson 6 Reteach (2)

Problem Solving

STRATEGY: Write a Number Sentence

4




\_\_\_\_\_ and \_\_\_\_\_ is \_\_\_\_\_ in all.

5



\_\_\_\_\_ and \_\_\_\_\_ is \_\_\_\_\_ in all.

6



\_\_\_\_\_ and \_\_\_\_\_ is \_\_\_\_\_ in all.

4 5 6 Write a number sentence to show how many in all. Write the numbers on the lines.