

Name _____

Lesson 4 Reteach

Use the = Symbol




8 minus 3 equals 5.

$$8 - 3 = 5$$


1




5




3




2



4



1



1 2 Trace the minus sign. Trace the equal sign. Write the number of objects that are left.