

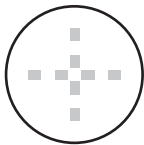


Lesson 3 Reteach

Use the + Symbol



1

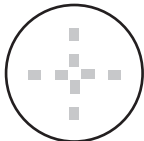




=



2

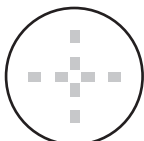




=

3





=

1 2 3 Count the apples on each tree. Use counters to model each set. Write the number on the line below. Trace the plus sign. Circle the groups to show adding them. Write how many apples in all.