


Lesson 5 Enrich


How Many in All?

1




$$\bigcirc + \bigcirc = \underline{\quad}$$

2



$$\bigcirc + \bigcirc = \underline{\quad}$$

3



$$\bigcirc + \bigcirc = \underline{\quad}$$

Listen to each story. Draw a picture to solve. Write the number sentence on the lines.

- 1 Sammy the dog has 2 bones. The neighbor's dog has 5 bones. Draw the bones. How many bones do the dogs have altogether?
- 2 Sue has 2 rabbits. She gave one rabbit 4 carrots, and she gave the other rabbit 5 carrots. Draw the carrots. How many carrots did the rabbits get altogether?
- 3 Mike saw a butterfly in the garden. Mike counted 8 spots on the butterfly's wings altogether. If there are 4 spots on one side of its body, how many spots are on the other side? Draw the spots.