

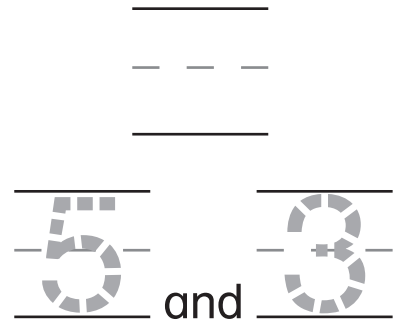

Name _____

Lesson 5 Enrich

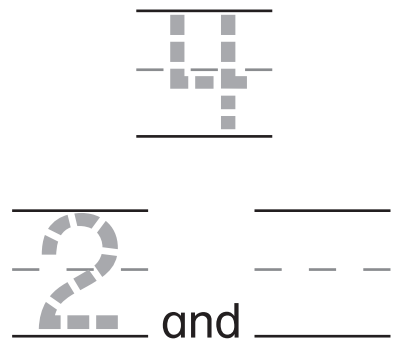
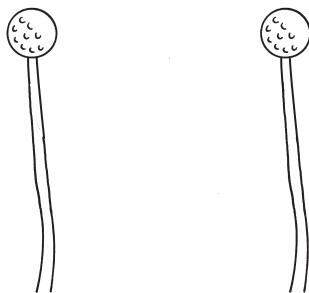
Problem Solving

STRATEGY: Act It Out

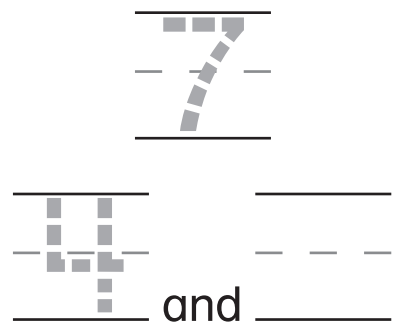
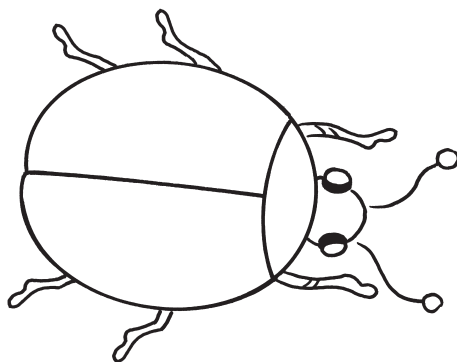
1



2



3



- 1 There are 5 apples on one tree. Draw the apples. There are 3 apples on the other tree. Draw them. Count the apples. Write the number. Trace the two numbers.
- 2 There are 4 petals in all. Trace the number. One flower has 2 petals. Draw the petals. Trace the number. How many petals are on the other flower? Draw the petals. Write the number.
- 3 The ladybug has 7 dots. Trace the number. One wing has 4 dots. Draw the dots. Trace the number. How many dots does the other wing have? Draw the dots. Write the number.