

Name _____

My Homework

Lesson 7

Subtract to Take Apart 10

Homework Helper



Need help? connectED.mcgraw-hill.com

1



$$10 - 9 = 1$$

2



$$10 - 3 = \underline{\quad}$$

3



$$10 - 6 = \underline{\quad}$$



Directions: 1–3. Use pennies to model taking away from 10. Trace the minus sign. Write how many are taken away. Trace the equals sign. Write how many are left.


4





10




5



10



6



10



Directions: 4–6. Use pennies to model taking away from 10. Trace the minus sign. Write how many are taken away. Trace the equals sign. Write how many are left.

Math at Home Give your child ten objects. Have your child practice taking away from 10.