

Name _____

My Homework

Lesson 5


How Many in All?

Homework Helper

eHelp

Need help? connectED.mcgraw-hill.com

1



2

+

3

=

5

2



+

=

3



+

=



Directions: 1–3. Count the objects in each group. Write the numbers and trace the symbols. Write how many there are in all.


4



Blank handwriting lines (top blue, middle dashed blue, bottom red).



Blank handwriting lines (top blue, middle dashed blue, bottom red).



Blank handwriting lines (top blue, middle dashed blue, bottom red).


5



Blank handwriting lines (top blue, middle dashed blue, bottom red).



Blank handwriting lines (top blue, middle dashed blue, bottom red).



Blank handwriting lines (top blue, middle dashed blue, bottom red).


6



Blank handwriting lines (top blue, middle dashed blue, bottom red).



Blank handwriting lines (top blue, middle dashed blue, bottom red).



Blank handwriting lines (top blue, middle dashed blue, bottom red).



Directions: 4–6. Count the objects in each group. Write the numbers and trace the symbols. Write how many there are in all.

Math at Home Have your child make a group of three items and a group of four items. Tell your child to join the groups and tell how many there are in all.